

MATE 318

Spring 2025

Homework 1

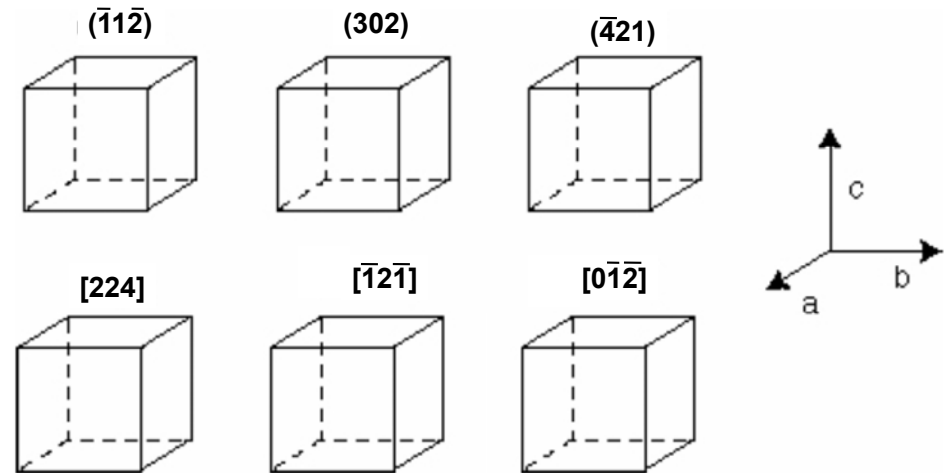
Due: March 11th, 2025

Group submission (up to 3 students per group) is allowed.

1

Question 1

Draw the three planes and three directions given below.



2

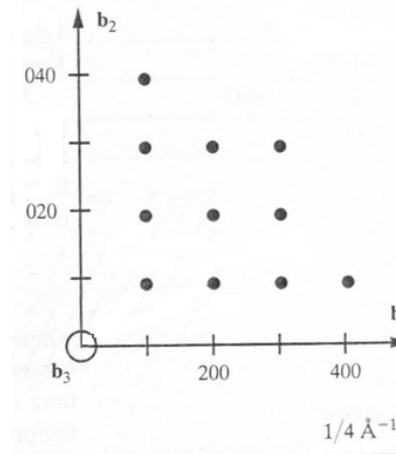
Question 2

Find the Miller indices of a plane that makes intercepts on a , b , c axes equal to 3 nm, 4 nm and 2 nm in a tetragonal crystal with the c/a ratio of 1.5

Question 3

The figure below is the reciprocal lattice of a cubic system with a lattice parameter of 4 Angstroms.

- Use this figure and find the angle between (140) and (310) planes
- Verify your result in a) through analytical solution.

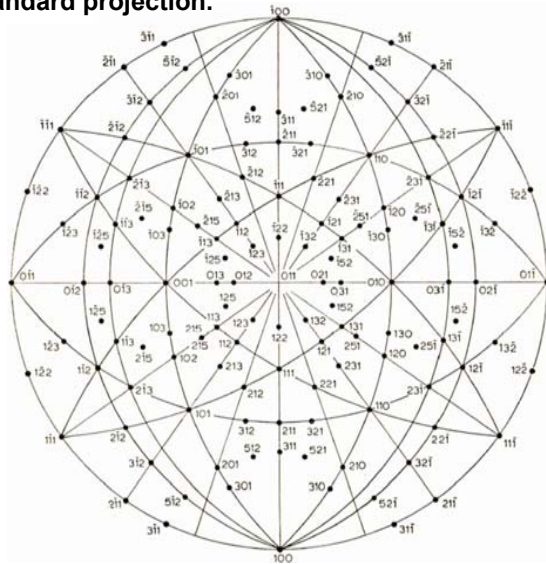


4

Question 4

For a cubic system:

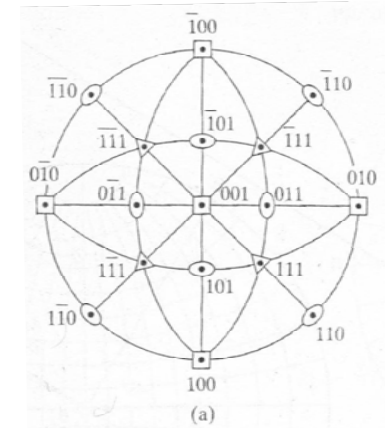
- Find an axis (direction) which is parallel to both (110) and (100).
- Suggest three more planes which are parallel to the same axis in (a). Show them in (011) standard projection.



5

Question 5

Using the standard (001) stereographic projection for a CUBIC crystal shown below as a starting point, show the positions of the (-1 0 0), (-1 0 1), (1 0 1) and (1 0 0) poles for a TETRAGONAL crystal, with $c = 1.59 a$. (HINT: Think about how the projected poles move as the crystal distorts from cubic to tetragonal.)



6

Question 6

The air absorption of X-rays can cause troubles, especially with longer wavelength X-rays.

- Calculate the transmission factor (I_x/I_0) of Mo K_α x-rays (0.071 nm) by one meter of air,
- How far should Mo K_α travel to have I_x/I_0 of 1/10000?

Assume that air has chemical composition of 75.4% N_2 , 23.2% O_2 and 1.4% Ar by weight with a density of 1.29×10^{-3} g/cm³.

7